

Name _____ Date _____

Spelling List 24

1. small _____
2. paw _____
3. chalk _____
4. caught _____
5. sauce _____
6. rest _____
7. ripe _____
8. reset _____
9. pets _____
10. replies _____

Challenge Words (optional)

11. curious _____
12. distance _____
13. enormous _____
14. gently _____
15. reptiles _____

Take-Home Sheet for Making Words

e	e	i	l	p	r	s	t

Name _____

Date _____

Homework # _____

Name _____


Practice

15-8

Comparing Lengths

Use a centimeter ruler to measure each path.


1. Path A



$$\underline{\quad\quad} + \underline{\quad\quad} = \underline{\quad\quad}$$

 centimeters long

2. Path B



$$\underline{\quad\quad} + \underline{\quad\quad} = \underline{\quad\quad}$$

 centimeters long

3. Which path is longer? Circle the answer.

Path A

Path B

4. Complete.

Path is centimeters longer than Path .

Name _____

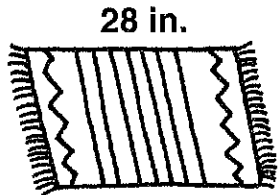
Practice

15-7

Adding and Subtracting in Measurement

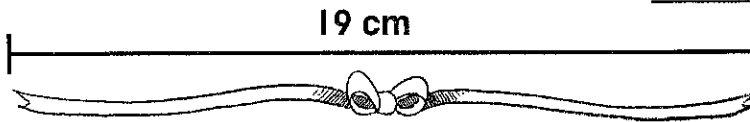

Write a number sentence to solve each problem.

1. What is the distance around the rug?



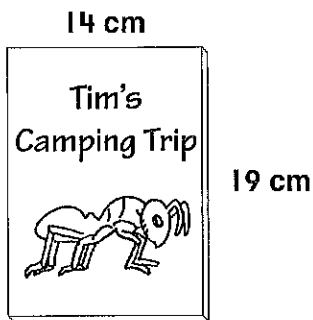
Distance around: _____ in.

2. How much shorter is the feather than the ribbon?



_____ cm shorter

3. **Algebra** Which number sentence shows the distance around the cover of the DVD case?



- (A) $14\text{ cm} + 19\text{ cm} + 14\text{ cm} = 47\text{ cm}$
- (B) $14\text{ cm} + 19\text{ cm} + 14\text{ cm} + 19\text{ cm} = 66\text{ cm}$
- (C) $19\text{ cm} + 14\text{ cm} = 33\text{ cm}$
- (D) $19\text{ cm} - 14\text{ cm} = 5\text{ cm}$